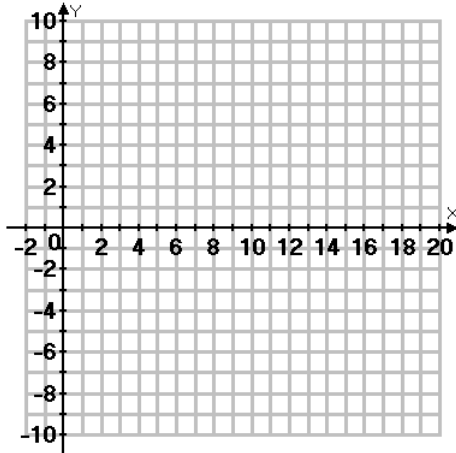


Assignment

Complete the table of values and graph the following logarithmic functions.

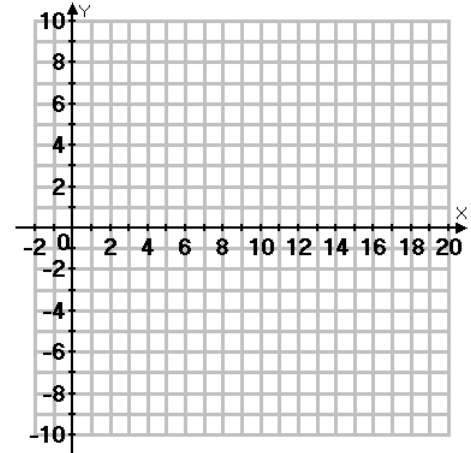
1) $y = \log_3(x-1) + 1$

x	y



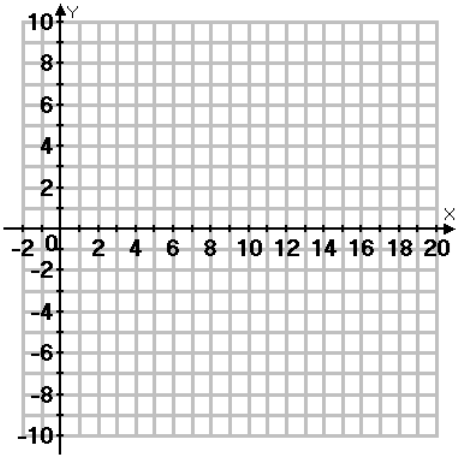
2) $y = \log_{1/2}(x+2) + 4$

x	y



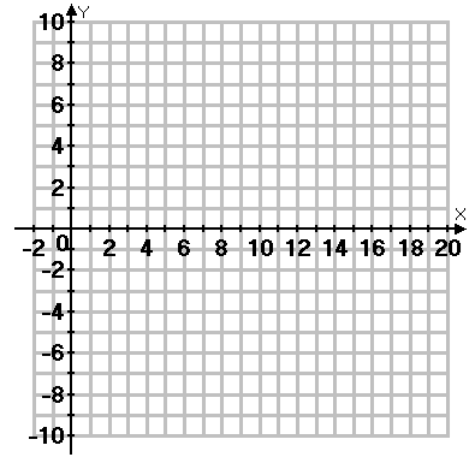
3) $y = \log_4 x - 5$

x	y



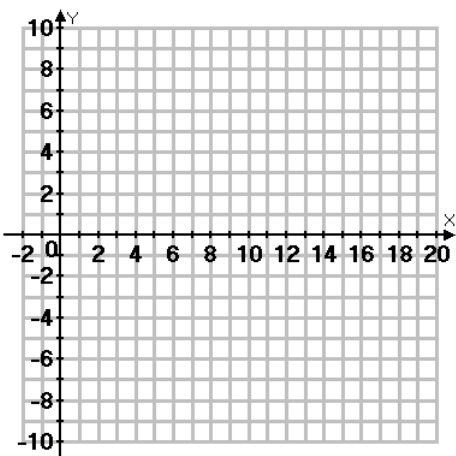
4) $y = -\log_{1/3}(x-2)$

x	y



5) $y = 3\log_2 x$

x	y



6) $y = 2\log_{1/4}(x+1) - 3$

x	y

